




Christmas Maths


Practise your maths skills by solving these problems! Get a grown up to check your answers afterwards.



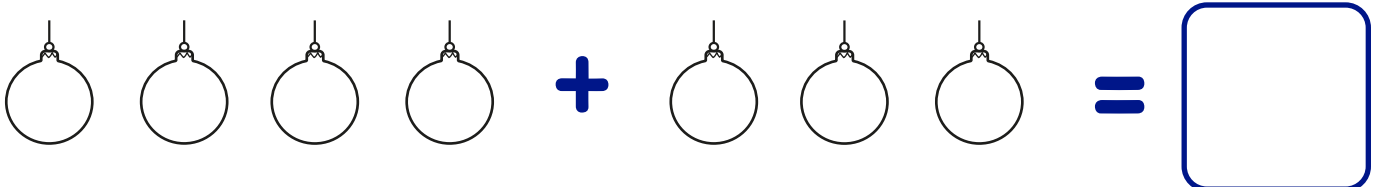
- 1** Fred has made some gingerbread men to share with a friend. He takes **2** and also gives **2** to his friend. How many gingerbread men are there?



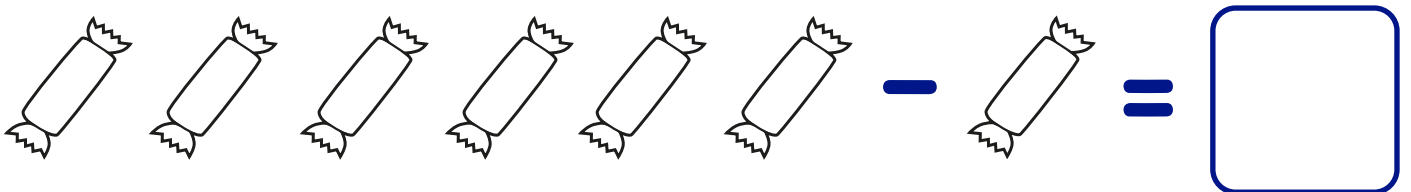
- 2** Sarah and her friends made **3** snowmen. The next day **2** had melted! How many snowmen are left?



- 3** Ali is decorating the Christmas tree. She starts by putting up **4** baubles and then puts up another **3**. How many baubles has she put on the tree?



- 4** **6** crackers have been put out on the table. Roxy the dog jumps up and takes **1**! How many are left on the table?



- 5** Santa left **2** presents for Jacob and **4** for Archie under the tree. How many presents are there in total?



Follow us:



© 2022 Orchard Toys Ltd

#OrchardToys

www.orchardtoys.com