

Number-Animals


I Spy and Count to 10



Count the number of each animal in the yellow box and write your totals in the checklist here:



Number Animals I-Spy and Count to 10 Checklist



Use your totals to complete the calculations. Give each animal its own total from your checklist and add or subtract the numbers:


 $+$

 $=$


 $+$

 $=$


 $+$

 $=$


 $-$

 $=$



 $-$

 $=$

Number Animals

I Spy and Count to 20

Count the number of each animal in the yellow box and write your totals in the checklist here:





Number Animals I-Spy and Count to 20 Checklist

Use your totals to complete the calculations. Give each animal its own total from your checklist and add or subtract the numbers:


 $+$

 $=$


 $+$

 $=$


 $+$

 $=$


 $-$

 $=$


 $-$

 $=$



Number Animals I Spy and Count to 10 - Answers



Number Animals I Spy and Count to 10 Checklist - Answers

Use your totals to complete the calculations. Give each animal its own total from your checklist and add or subtract the numbers:


 $3 + 8 = 11$



 $8 + 5 = 13$



 $5 + 3 = 8$




 $10 - 8 = 2$



 $8 - 1 = 7$


Number Animals I Spy and Count to 20 - Answers



Number Animals I Spy and Count to 20 Checklist - Answers

Use your totals to complete the calculations. Give each animal its own total from your checklist and add or subtract the numbers:

 $12 + 3 = 15$ 

 $20 + 6 = 26$ 

 $15 + 3 = 18$ 

 $15 - 6 = 9$ 

 $12 - 3 = 9$ 